


Name: _____ Email: _____ Date: _____
v. 2

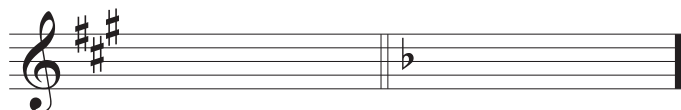
Musicianship Assessment: written portion (practice)

Complete as much of the following as you can in 10 minutes.

I. Use any combination of the random note values below and assemble them in 6/8 on the provided blank staff:



II. Identify the key signatures:



Major: _____

Major: _____

Minor: _____

Minor: _____

III. Write the indicated key signatures on the staff:




G major

B \flat minor

IV. Identify these chords using any labeling system with which you are familiar:



V. Identify the intervals (ex., *P5* or *maj3*):



Bonus: Compose a short melody, approximately 4-8 measures long. Choose a meter and a key, and add bar lines as you need them:

